

# IIT-JEE

## WB-JEE - 2009

### PHYSICS & CHEMISTRY QUESTIONS & ANSWERS

1. One Kg of copper is drawn into a wire of 1 mm diameter and a wire of 2 mm diameter. The resistance of the two wires will be in the ratio  
(A) 2 : 1                      (B) 1 : 2                      (C) 16 : 1                      (D) 4 : 1

**Ans : (C)**

**Hints :** Mass =  $(\pi r_1^2 \ell_1) \sigma$  (1st wire)

Mass =  $(\pi r_2^2 \ell_2) \sigma$  (2nd wire)

$$(\pi r_1^2 \ell_1) \sigma = (\pi r_2^2 \ell_2) \sigma$$

$$\frac{\ell_1}{\ell_2} = \left( \frac{r_2}{r_1} \right)^2$$

$$\frac{R_1}{R_2} = \frac{\rho \frac{\ell_1}{A_1}}{\rho \frac{\ell_2}{A_2}} = \frac{\ell_1}{\ell_2} \times \frac{A_2}{A_1} = \frac{\ell_1}{\ell_2} \times \left( \frac{r_2}{r_1} \right)^2$$

$$= \left( \frac{r_2}{r_1} \right)^4$$

$$\Rightarrow 16 : 1$$

2. An electrical cable having a resistance of  $0.2 \Omega$  delivers 10kw at 200V D.C. to a factory. What is the efficiency of transmission?  
(A) 65%                      (B) 75%                      (C) 85%                      (D) 95%

**Ans : (D)**

**Hints :**  $P = VI \Rightarrow I = \frac{10 \times 10^3}{200} = 50 A$ , Power loss =  $(50)^2 (0.2) = 500 W$

$$\text{Efficiency} = \frac{10000 \times 100}{10000 + 500} = 95.23\%$$

3. A wire of resistance  $5\ \Omega$  is drawn out so that its new length is 3 times its original length. What is the resistance of the new wire?  
 (A)  $45\ \Omega$  (B)  $15\ \Omega$  (C)  $5/3\ \Omega$  (D)  $5\ \Omega$

Ans : (A)

$$\text{Hints : } \left(\frac{r_1}{r_2}\right)^2 = \left(\frac{\ell_2}{\ell_1}\right) = \frac{3\ell}{\ell} = 3$$

$$\left(\frac{R_2}{R_1}\right) = \frac{\ell_2}{\ell_1} \times \frac{A_1}{A_2} = 3 \times \left(\frac{r_1}{r_2}\right)^2 = 3 \times 3 \Rightarrow R_2 = 45$$

4. Two identical cells each of emf  $E$  and internal resistance  $r$  are connected in parallel with an external resistance  $R$ . To get maximum power developed across  $R$ , the value of  $R$  is  
 (A)  $R=r/2$  (B)  $R=r$  (C)  $R=r/3$  (D)  $R=2r$

Ans : (A)

$$\text{Hints : } R_{eq} = \frac{r}{2} + R = \frac{r + 2R}{2}$$

$$I = \frac{2E}{r + 2R}$$

For max. power consumption,  $I$  should be max. So denominator should be min. for that

$$r + 2R = (\sqrt{r} - \sqrt{2R})^2 + 2\sqrt{r}\sqrt{2R} \Rightarrow \sqrt{r} - \sqrt{2R} = 0 \Rightarrow R = r/2$$

5. To write the decimal number 37 in binary, how many binary digits are required?  
 (A) 5 (B) 6 (C) 7 (D) 4

Ans : (B)

Hints :

2	37	1
2	18	0
2	9	1
2	4	0
2	2	0
	1	

$(100101) \Rightarrow 6$  digits

6. A junction diode has a resistance of  $25\ \Omega$  when forward biased and  $2500\ \Omega$  when reverse biased. The current in the diode, for the arrangement shown will be



- (A)  $\frac{1}{15}\ \text{A}$  (B)  $\frac{1}{7}\ \text{A}$  (C)  $\frac{1}{25}\ \text{A}$  (D)  $\frac{1}{180}\ \text{A}$

Ans : (B)

Hints :  $R_{eq} = 25 + 10 = 35\ \Omega$

Because diode is forward biased. So  $I = \frac{V}{R_{eq}} = \frac{5}{35} = \frac{1}{7}\ \text{A}$

7. If the electron in a hydrogen atom jumps from an orbit with level  $n_1 = 2$  to an orbit with level  $n_2 = 1$  the emitted radiation has a wavelength given by

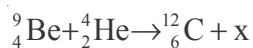
(A)  $\lambda = 5/3R$  (B)  $\lambda = 4/3R$  (C)  $\lambda = R/4$  (D)  $\lambda = 3R/4$

**Ans : (B)**

$$\text{Hints : } \frac{1}{\lambda} = R \left( \frac{1}{n_1^2} - \frac{1}{n_2^2} \right) = R \left( \frac{1}{1^2} - \frac{1}{2^2} \right) = \frac{3R}{4}$$

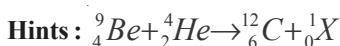
$$\Rightarrow \lambda = \frac{4}{3R}$$

8. What is the particle x in the following nuclear reaction :



(A) electron (B) proton (C) Photon (D) Neutron

**Ans : (D)**



Hence X represents neutron ( ${}^1_0n$ )

9. An alternating current of rms value 10 A is passed through a  $12 \Omega$  resistor. The maximum potential difference across the resistor is

(A) 20V (B) 90V (C) 1969.68V (D) none

**Ans : (C)**

**Hints :**  $I_{\text{rms}} = 10\text{A}$

$$I_{\text{rms}} = \frac{I_0}{\sqrt{2}} \Rightarrow I_0 = \sqrt{2} \times 10 = 10\sqrt{2}$$

$$\text{Max. P.D.} = \sqrt{2} \times 10 \times 12 = 120 \times 1.414 = 169.68 \text{ V}$$

10. Which of the following relation represent Biot-Savart's law?

(A)  $d\vec{B} = \frac{\mu_0}{4\pi} \frac{d\vec{l} \times \vec{r}}{r}$  (B)  $d\vec{B} = \frac{\mu_0}{4\pi} \frac{d\vec{l} \times \hat{r}}{r^3}$  (C)  $d\vec{B} = \frac{\mu_0}{4\pi} \frac{d\vec{l} \times \vec{r}}{r^3}$  (D)  $d\vec{B} = \frac{\mu_0}{4\pi} \frac{d\vec{l} \times \hat{r}}{r^4}$

**Ans : (C)**

$$\text{Hints : } d\vec{B} = \frac{\mu_0}{4\pi} \frac{I(d\vec{\ell} \times \vec{r})}{r^3}$$

Note :- In question paper current (I) is missing

11.  $\vec{A}$  and  $\vec{B}$  are two vectors given by  $\vec{A} = 2\hat{i} + 3\hat{j}$  and  $\vec{B} = \hat{i} + \hat{j}$ . The magnitude of the component of  $\vec{A}$  along  $\vec{B}$  is

(A)  $\frac{5}{\sqrt{2}}$  (B)  $\frac{3}{\sqrt{2}}$  (C)  $\frac{7}{\sqrt{2}}$  (D)  $\frac{1}{\sqrt{2}}$

**Ans : (A)**

$$\text{Hints : Magnitude of components of } \vec{A} \text{ along } \vec{B} = \frac{\vec{A} \cdot \vec{B}}{|\vec{B}|} = \frac{(2\hat{i} + 3\hat{j}) \cdot (\hat{i} + \hat{j})}{\sqrt{2}} = \frac{5}{\sqrt{2}}$$

12. Given  $\vec{C} = \vec{A} \times \vec{B}$  and  $\vec{D} = \vec{B} \times \vec{A}$ . What is the angle between  $\vec{C}$  and  $\vec{D}$  ?  
 (A)  $30^\circ$  (B)  $60^\circ$  (C)  $90^\circ$  (D)  $180^\circ$

**Ans : (D)**

**Hints :**  $\vec{C}$  and  $\vec{D}$  are antiparallel since  $\vec{A} \times \vec{B} = -(\vec{B} \times \vec{A})$

13. The acceleration 'a' (in  $\text{ms}^{-2}$ ) of a body, starting from rest varies with time t (in s) following the equation  $a = 3t + 4$ . The velocity of the body at time  $t = 2\text{s}$  will be  
 (A)  $10 \text{ ms}^{-1}$  (B)  $18 \text{ ms}^{-1}$  (C)  $14 \text{ ms}^{-1}$  (D)  $26 \text{ ms}^{-1}$

**Ans : (C)**

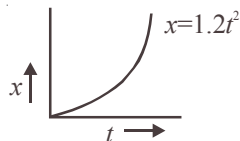
**Hints :**  $a = 3t + 4$

$$\frac{dV}{dt} = 3t + 4$$

$$\int_0^V dV = \int_0^t (3t + 4) dt$$

$$V = \frac{3t^2}{2} + 4t = \frac{12}{2} + 8 = 14 \text{ m/s}$$

14. Figure below shows the distance-time graph of the motion of a car. It follows from the graph that the car is



- (A) at rest (B) in uniform motion  
 (C) in non-uniform acceleration (D) uniformly accelerated

**Ans : (D)**

**Hints :** Slope is increasing with constant rate. i.e motion is uniformly accelerated

$$x = 1.2t^2 \Rightarrow v = 2.4t \Rightarrow a = 2.4 \text{ m/s}^2$$

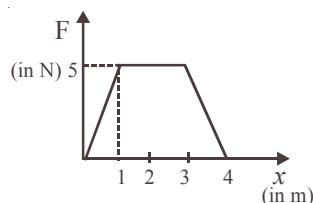
15. Two particles have masses  $m$  &  $4m$  and their kinetic energies are in the ratio 2: 1. What is the ratio of their linear momenta ?

- (A)  $\frac{1}{\sqrt{2}}$  (B)  $\frac{1}{2}$  (C)  $\frac{1}{4}$  (D)  $\frac{1}{16}$

**Ans : (A)**

**Hints :**  $\frac{KE_1}{KE_2} = \frac{\frac{p_1^2}{2m}}{\frac{p_2^2}{2 \times 4m}} = \frac{2}{1} \Rightarrow \frac{p_1}{p_2} = \frac{1}{\sqrt{2}}$

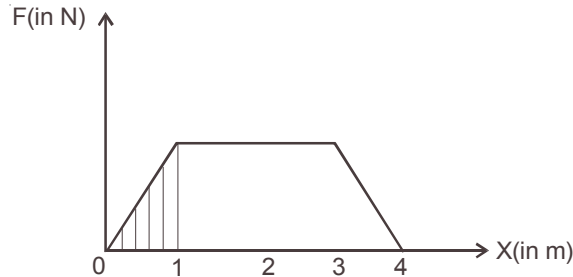
16. The force F acting on a particle moving in a straight line is shown below. What is the work done by the force on the particle in the 1<sup>st</sup> meter of the trajectory ?



- (A) 5J (B) 10J (C) 15J (D) 2.5J

**Ans : (D)**

**Hints :** Work done in 1 meter = area of shaded curve =  $\frac{1}{2} \times 1 \times 5 = 2.5 \text{ J}$



17. If the kinetic energy of a body changes by 20% then its momentum would change by –  
(A) 20% (B) 24% (C) 40% (D) 44%

**Ans : (No answer matching)**

$$\text{Hints : } \frac{\frac{p_f^2}{2m} - \frac{p_i^2}{2m}}{\frac{p_i^2}{2m}} \times 100 = 20$$

$$\Rightarrow \frac{p_f}{p_i} = \sqrt{1.2} = 1.095 \Rightarrow \frac{p_f - p_i}{p_i} = 0.095$$

Therefore % increase = 9.5%

18. A bullet is fired with a velocity  $u$  making an angle of  $60^\circ$  with the horizontal plane. The horizontal component of the velocity of the bullet when it reaches the maximum height is

- (A)  $u$  (B) 0 (C)  $\frac{\sqrt{3}u}{2}$  (D)  $\frac{u}{2}$

**Ans : (D)**

**Hints :** Horizontal velocity would be constant so the value of velocity at the highest point will be  $u/2$

19. A particle is projected at  $60^\circ$  to the horizontal with a kinetic energy  $K$ . The kinetic energy at the highest point is

- (A)  $K$  (B) zero (C)  $\frac{K}{4}$  (D)  $\frac{K}{2}$

**Ans : (C)**

**Hints :** At highest point kinetic energy =  $\frac{1}{2}m(v \cos 60^\circ)^2 = \frac{1}{4} \times \frac{1}{2}m v^2 = K/4$

20. The poisson's ratio of a material is 0.5. If a force is applied to a wire of this material, there is a decrease in the cross-sectional area by 4%. The percentage increase in the length is :

- (A) 1% (B) 2% (C) 2.5% (D) 4%

**Ans : (D)**

**Hints :** Poisson ratio = 0.5

Therefore density is constant hence change in volume is zero we have

$$V = A \times \ell = \text{constant}$$

$$\log V = \log A + \log \ell \text{ or } \frac{dA}{A} + \frac{d\ell}{\ell} = 0 \Rightarrow \frac{d\ell}{\ell} = -\frac{dA}{A}$$

That is 4%

21. Two spheres of equal masses but radii  $r_1$  and  $r_2$  are allowed to fall in a liquid of infinite column. The ratio of their terminal velocities is

(A) 1 (B)  $r_1 : r_2$  (C)  $r_2 : r_1$  (D)  $\sqrt{r_1} : \sqrt{r_2}$

**Ans : (Data incomplete)**

**Hints :** We have  $v_T = \frac{2r^2(\sigma - \rho)g}{9\eta}$

$$\frac{v_1}{v_2} = \left(\frac{r_1}{r_2}\right)^2 \frac{(\sigma_1 - \rho)}{(\sigma_2 - \rho)} ; \text{ given } m_1 = m_2 \Rightarrow \left(\frac{r_1}{r_2}\right)^3 = \frac{\sigma_2}{\sigma_1}$$

22. Two massless springs of force constants  $K_1$  and  $K_2$  are joined end to end. The resultant force constant  $K$  of the system is

(A)  $K = \frac{K_1 + K_2}{K_1 K_2}$  (B)  $K = \frac{K_1 - K_2}{K_1 K_2}$  (C)  $K = \frac{K_1 K_2}{K_1 + K_2}$  (D)  $K = \frac{K_1 K_2}{K_1 - K_2}$

**Ans : (C)**

**Hints :** In series  $K_{\text{eff}} = \frac{K_1 K_2}{K_1 + K_2}$

23. A spring of force constant  $k$  is cut into two equal halves. The force constant of each half is

(A)  $\frac{k}{\sqrt{2}}$  (B)  $k$  (C)  $\frac{k}{2}$  (D)  $2k$

**Ans : (D)**

**Hints :** As  $K \ell = \text{constant}$

$$K' = 2K$$

24. Two rods of equal length and diameter have thermal conductivities 3 and 4 units respectively. If they are joined in series, the thermal conductivity of the combination would be

(A) 3.43 (B) 3.5 (C) 3.4 (D) 3.34

**Ans : (A)**

**Hints :** In series  $R = R_1 + R_2$

$$\frac{2\ell}{K_{\text{eff}} A} = \frac{\ell}{K_1 A} + \frac{\ell}{K_2 A}$$

$$K_{\text{eff}} = \frac{24}{7} = 3.43$$

25. 19 g of water at  $30^\circ\text{C}$  and 5 g of ice at  $-20^\circ\text{C}$  are mixed together in a calorimeter. What is the final temperature of the mixture? Given specific heat of ice =  $0.5 \text{ cal g}^{-1}(\text{C}^\circ)^{-1}$  and latent heat of fusion of ice =  $80 \text{ cal g}^{-1}$

(A)  $0^\circ\text{C}$  (B)  $-5^\circ\text{C}$  (C)  $5^\circ\text{C}$  (D)  $10^\circ\text{C}$

**Ans : (C)**

**Hints :**  $5 \times .5 \times 20 + 5 \times 80 + 5t = 19 \times 1 \times (30 - t)$

$t = 5^\circ\text{C}$

26. It is difficult to cook rice in an open vessel by boiling it at high altitudes because of  
 (A) low boiling point and high pressure (B) high boiling point and low pressure  
 (C) low boiling point and low pressure (D) high boiling point and high pressure

**Ans : (C)**

**Hints :** At high altitude pressure is low and boiling point also low

27. The height of a waterfall is 50 m. If  $g = 9.8 \text{ ms}^{-2}$  the difference between the temperature at the top and the bottom of the waterfall is:  
 (A)  $1.17^\circ\text{C}$  (B)  $2.17^\circ\text{C}$  (C)  $0.117^\circ\text{C}$  (D)  $1.43^\circ\text{C}$

**Ans : (C)**

**Hints :**  $\frac{mgh}{J} = ms\Delta t \Rightarrow \Delta t = 0.117^\circ\text{C}$

28. The distance between an object and a divergent lens is  $m$  times the focal length of the lens. The linear magnification produced by the lens is  
 (A)  $m$  (B)  $\frac{1}{m}$  (C)  $m+1$  (D)  $\frac{1}{m+1}$

**Ans : (D)**

**Hints :**  $u = -mf$

$$\frac{1}{v} - \frac{1}{(-mf)} = -\frac{1}{f} \Rightarrow \frac{1}{v} = -\frac{1}{f} \left(1 + \frac{1}{m}\right) \Rightarrow -\frac{v}{u} = \left(\frac{1}{1+m}\right)$$

29. A 2.0 cm object is placed 15 cm in front of a concave mirror of focal length 10 cm. What is the size and nature of the image?  
 (A) 4 cm, real (B) 4 cm, virtual (C) 1.0 cm, real (D) None

**Ans : (A)**

**Hints :**  $\frac{1}{v} - \frac{1}{15} = \frac{1}{-10} \Rightarrow v = -30 \text{ cm}$

$$m = \frac{-30}{-15} = 2, \text{ image size} = 4 \text{ cm}$$

30. A beam of monochromatic blue light of wavelength  $4200 \text{ \AA}$  in air travels in water of refractive index  $4/3$ . Its wavelength in water will be:  
 (A)  $4200 \text{ \AA}$  (B)  $5800 \text{ \AA}$  (C)  $4150 \text{ \AA}$  (D)  $3150 \text{ \AA}$

**Ans : (D)**

**Hints :** In water  $\lambda = \frac{4200}{\frac{4}{3}} = 3150 \text{ \AA}$

31. Two identical light waves, propagating in the same direction, have a phase difference  $\delta$ . After they superpose the intensity of the resulting wave will be proportional to  
 (A)  $\cos \delta$  (B)  $\cos(\delta/2)$  (C)  $\cos^2(\delta/2)$  (D)  $\cos^2\delta$

**Ans : (C)**

**Hints :**  $I = 4I_0 \cos^2\left(\frac{\delta}{2}\right) \Rightarrow I \propto \cos^2\left(\frac{\delta}{2}\right)$

32. The equation of state for  $n$  moles of an ideal gas is  $PV = nRT$ , where  $R$  is a constant. The SI unit for  $R$  is  
 (A)  $\text{JK}^{-1}$  per molecule (B)  $\text{JK}^{-1} \text{mol}^{-1}$  (C)  $\text{J Kg}^{-1} \text{K}^{-1}$  (D)  $\text{JK}^{-1} \text{g}^{-1}$

**Ans : (B)**

**Hints :**  $\text{JK}^{-1} \text{mol}^{-1}$

33. At a certain place, the horizontal component of earth's magnetic field is  $\sqrt{3}$  times the vertical component. The angle of dip at that place is  
 (A)  $30^\circ$  (B)  $60^\circ$  (C)  $45^\circ$  (D)  $90^\circ$

**Ans : (A)**

**Hints :**  $\tan \theta = \frac{V}{H} = \frac{1}{\sqrt{3}} \Rightarrow \theta = 30^\circ$

34. The number of electron in 2 coulomb of charge is  
 (A)  $5 \times 10^{29}$  (B)  $12.5 \times 10^{18}$  (C)  $1.6 \times 10^{19}$  (D)  $9 \times 10^{11}$

**Ans : (B)**

**Hints :**  $n = \frac{2}{1.6 \times 10^{-19}} = 12.5 \times 10^{18}$

35. The current flowing through a wire depends on time as  $I = 3t^2 + 2t + 5$ . The charge flowing through the cross section of the wire in time from  $t = 0$  to  $t = 2$  sec. is  
 (A) 22 C (B) 20 C (C) 18 C (D) 5 C

**Ans : (A)**

**Hints :**  $Q = \int_0^2 (3t^2 + 2t + 5) dt = 22 C$

36. If the charge on a capacitor is increased by 2 coulomb, the energy stored in it increases by 21%. The original charge on the capacitor is  
 (A) 10 C (B) 20 C (C) 30 C (D) 40 C

**Ans : (B)**

**Hints :**  $\frac{\frac{q_f^2}{2C} - \frac{q_i^2}{2C}}{\frac{q_i^2}{2C}} \times 100 = 21$  and  $q_f - q_i = 2$

solving we get  $q_i = 20$  coulomb

37. The work done in carrying a charge  $Q$  once around a circle of radius  $r$  about a charge  $q$  at the centre is  
 (A)  $\frac{qQ}{4\pi\epsilon_0 r}$  (B)  $\frac{qQ}{4\pi\epsilon_0} \frac{1}{\pi r}$  (C)  $\frac{qQ}{4\pi\epsilon_0} \left( \frac{1}{2\pi r} \right)$  (D) 0

**Ans : (D)**

**Hints :** Work done by conservative force in a round trip is zero

38. Four capacitors of equal capacitance have an equivalent capacitance  $C_1$  when connected in series and an equivalent capacitance  $C_2$  when connected in parallel. The ratio  $\frac{C_1}{C_2}$  is:

- (A) 1/4 (B) 1/16 (C) 1/8 (D) 1/12

**Ans : (B)**

**Hints :**  $C_1 = \frac{C}{4}$  and  $C_2 = 4C \Rightarrow \frac{C_1}{C_2} = \frac{1}{16}$



39. Magnetic field intensity  $H$  at the centre of a circular loop of radius  $r$  carrying current  $I$  e.m.u is  
 (A)  $r/I$  oersted (B)  $2\pi I/r$  oersted (C)  $I/2\pi r$  oersted (D)  $2\pi r/I$  oersted

**Ans : (B)**

$$\text{Hints : } H = \frac{\mu_0 I}{2r} = \frac{\mu_0}{4\pi} \times \frac{2\pi I}{r}$$

$$\text{In e.m.u system } \frac{\mu_0}{4\pi} = 1. \text{ So } H = \frac{2\pi I}{r}$$

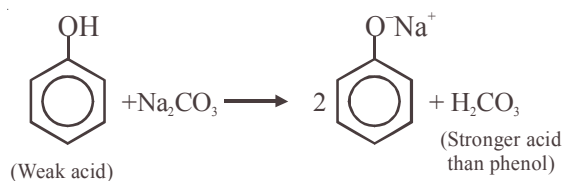
40. Which of the following materials is the best conductor of electricity?  
 (A) Platinum (B) Gold (C) Silicon (D) Copper

**Ans : (D)**

41. Which statement is incorrect  
 (A) Phenol is a weak acid (B) Phenol is an aromatic compound  
 (C) Phenol liberates  $\text{CO}_2$  from  $\text{Na}_2\text{CO}_3$  soln (D) Phenol is soluble in NaOH

**Ans : (C)**

**Hints :** Phenol does not liberate  $\text{CO}_2$  from  $\text{Na}_2\text{CO}_3$  solution

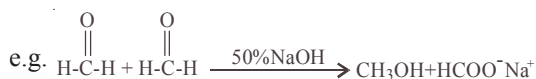


Note : Strong acid is not formed by weak acid

42. In which of the following reactions new carbon-carbon bond is not formed :  
 (A) Cannizzaro reaction (B) Wurtz reaction (C) Aldol condensation (D) Friedel-Craft reaction

**Ans : (A)**

**Hints :** In cannizzaro's reaction no new C-C bond is formed



43. A compound is formed by substitution of two chlorine for two hydrogens in propane. The number of possible isomeric compounds is  
 (A) 4 (B) 3 (C) 5 (D) 2

**Ans : (C)**

**Hints :**  $\text{C}_3\text{H}_8 \xrightarrow[-2\text{H}]{+2\text{Cl}} \text{C}_3\text{H}_6\text{Cl}_2$ , following isomers of  $\text{C}_3\text{H}_6\text{Cl}_2$  is possible



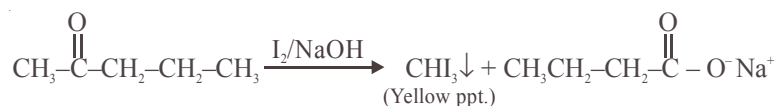
Due to presence of chiral carbon compound (IV) is optically active and forms an enantiomer. So total no of isomers = 5

44. Which one of the following is called a carbylamine?  
 (A)  $\text{R-CN}$  (B)  $\text{R-CONH}_2$  (C)  $\text{R-CH=NH}$  (D)  $\text{RNC}$

**Ans : (D)**

45. For making distinction between 2-pentanone and 3-pentanone the reagent to be employed is  
 (A)  $K_2Cr_2O_7/H_2SO_4$  (B) Zn-Hg/HCl (C)  $SeO_2$  (D) Iodine/NaOH

**Hints :** In 2-pentanone *ie.*,  $CH_3-\overset{\overset{O}{\parallel}}{C}-CH_2CH_2CH_3$ ,  $CH_3-\overset{\overset{O}{\parallel}}{C}-$  group is present due to which it can show iodoform test. *ie.*,



46. Which one of the following formulae does not represent an organic compound?  
 (A)  $C_4H_{10}O_4$  (B)  $C_4H_8O_4$  (C)  $C_4H_7ClO_4$  (D)  $C_4H_9O_4$

**Ans : (D)**

**Hints :** Unsaturation factor = 0, 1, 1, 0.5 Hence (D)

47. The catalyst used for olefin polymerization is  
 (A) Ziegler-Natta Catalyst (B) Wilkinson Catalyst (C) Raney nickel catalyst (D) Merrifield resin

**Ans : (A)**

**Hints :**  $TiCl_3 + (C_2H_5)_3Al$

48. The oxidant which is used as an antiseptic is :  
 (A)  $KBrO_3$  (B)  $KMnO_4$  (C)  $CrO_3$  (D)  $KNO_3$

**Ans : (B)**

49. Which of the following contributes to the double helical structure of DNA  
 (A) hydrogen bond (B) covalent bond (C) disulphide bond (D) van-der Waal's force

**Ans : (A)**

50. The monomer used to produce orlon is  
 (A)  $CH_2=CHF$  (B)  $CH_2=CCl_2$  (C)  $CH_2=CHCl$  (D)  $CH_2=CH-CN$

**Ans : (D)**

**Hints :** Orlon or PAN

Monomer  $\Rightarrow CH_2=CH-CN$

51. 1 mole of photon, each of frequency  $2500 S^{-1}$ , would have approximately a total energy of :  
 (A) 1 erg (B) 1 Joule (C) 1 eV (D) 1 MeV

**Ans : (A)**

**Hints :** Total Energy =  $Nh\nu = 6.022 \times 10^{23} \times 6.626 \times 10^{-34} J.S. \times 2500 s^{-1} = 9.9 \text{ erg} \approx 10 \text{ erg}$

In (A) option, it should be 10 erg instead of 1 erg.

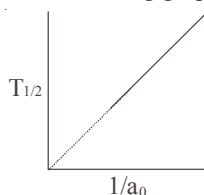
52. If  $n_t$  number of radioatoms are present at time t, the following expression will be a constant :  
 (A)  $n_t/t$  (B)  $\ln n_t/t$  (C)  $d \ln n_t/dt$  (D)  $t.n_t$

**Ans : (C)**

**Hints :**  $-\frac{dN}{dt} = \lambda N \Rightarrow -\frac{d \ln N}{dt} = \lambda$

Hence (C)

53. The following graph shows how  $T_{1/2}$  (half-life) of a reactant R changes with the initial reactant concentration  $a_0$ .



The order of the reaction will be :

- (A) 0 (B) 1 (C) 2 (D) 3

**Ans : (C)**

**Hints :**  $t_{1/2} \propto \frac{1}{a^{n-1}}$

Hence (C)

54. The second law of thermodynamics says that in a cyclic process :

- (A) work cannot be converted into heat (B) heat cannot be converted into work  
(C) work cannot be completely converted into heat (D) heat cannot be completely converted into work

**Ans : (D)**

**Hints :** Because 0 K temperature is unattainable.

55. The equilibrium constant (K) of a reaction may be written as :

- (A)  $K = e^{-\Delta G/RT}$  (B)  $K = e^{-\Delta G^0/RT}$  (C)  $K = e^{-\Delta H/RT}$  (D)  $K = e^{-\Delta H^0/RT}$

**Ans : (B)**

**Hints :**  $\Delta G^0 = -RT \ln K$

$$\Rightarrow \frac{\Delta G^0}{-RT} = \ln K$$

$$\therefore K = e^{-\Delta G^0/RT}$$

56. For the reaction  $SO_2 + \frac{1}{2}O_2 = SO_3$ , if we write  $K_p = K_c(RT)^x$ , then x becomes

- (A) -1 (B)  $-\frac{1}{2}$  (C)  $\frac{1}{2}$  (D) 1

**Ans : (B)**

**Hints :**  $K_p = K_c(RT)^x$

$$x = (\sum n_{(g)})_P - (\sum n_{(g)})_R$$

$$= 1 - \frac{3}{2} = -\frac{1}{2}$$

57. If it is assumed that  ${}^{235}_{92}U$  decays only by emitting  $\alpha$  and  $\beta$  particles, the possible product of the decay is :

- (A)  ${}^{225}_{89}Ac$  (B)  ${}^{227}_{89}Ac$  (C)  ${}^{230}_{89}Ac$  (D)  ${}^{231}_{89}Ac$

**Ans : (B)**

**Hints :** New mass no. =  $235 - 2 \times 4 = 227$

New at. no. =  $92 - 2 \times 2 + 1 = 92 - 4 + 1 = 89$

58. The time taken for 10% completion of a first order reactin is 20 mins. Then, for 19% completion, the reaction will take

- (A) 40 mins (B) 60 mins (C) 30 mins (D) 50 mins

**Ans : (A)**

**Hints :**  $t = \frac{2.303}{\lambda} \log \frac{N_0}{N}$

$$20 = \frac{2.303}{\lambda} \log \frac{100}{90} \quad \dots\dots (i)$$

$$t = \frac{2.303}{\lambda} \log \frac{100}{81} \quad \dots\dots (ii)$$

equation (i) / (ii)

$\therefore t = 40 \text{ min.}$

59. Which of the following will decrease the pH of a 50 ml solution of 0.01 M HCl?  
 (A) addition of 5 ml of 1 M HCl (B) addition of 50 ml of 0.01 M HCl  
 (C) addition of 50 ml of 0.002 M HCl (D) addition of Mg

**Ans : (A)**

**Hints :** 50 ml 0.01 M  $\equiv$  50  $\times$  0.01 = 0.5 millimole

5 ml 1 (M)  $\equiv$  5  $\times$  1 = 5 millimole

Total millimoles = 5.5 millimole

Total volume = 55 ml.

$$\text{Molarity} = \frac{5.5}{55} = 0.1(\text{M}) = 10^{-1}(\text{M})$$

pH = 1

60. Equal volumes of molar hydrochloric acid and sulphuric acid are neutralised by dilute NaOH solution and x kcal and y kcal of heat are liberated respectively. Which of the following is true?

- (A)  $x=y$  (B)  $x = \frac{y}{2}$  (C)  $x=2y$  (D) none of the above

**Ans : (B)**

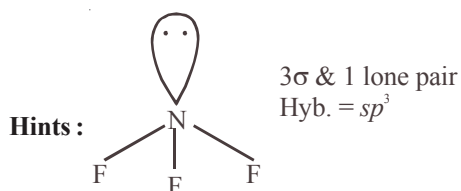
**Hints :** Enthalpy of 1 g equivalent of strong acid and 1 g equivalent strong base = 13.7 kcal

Equal volume contains double eq. of  $\text{H}_2\text{SO}_4$  than HCl

61. Hybridisation of central atom in  $\text{NF}_3$  is

- (A)  $sp^3$  (B) sp (C)  $sp^2$  (D)  $dsp^2$

**Ans : (A)**



62. Of the following compounds the most acidic is

- (A)  $\text{As}_2\text{O}_3$  (B)  $\text{P}_2\text{O}_5$  (C)  $\text{Sb}_2\text{O}_3$  (D)  $\text{Bi}_2\text{O}_3$

**Ans : (B)**

**Hints :** In a group as we go downwards, the oxide basic character increases hence maximum acidic oxide is  $\text{P}_2\text{O}_5$

63. The half-life of a radioactive element is 10 hours. How much will be left after 4 hours in 1 g atom sample?

- (A)  $45.6 \times 10^{23}$  atoms (B)  $4.56 \times 10^{23}$  atoms (C)  $4.56 \times 10^{21}$  atoms (D)  $4.56 \times 10^{20}$  atoms

**Ans : (B)**

**Hints :**  $t_{1/2} = 10$  hr.  $K = \frac{0.693}{10}$

$$4 = \frac{2.303 \times 10}{0.693} \log \frac{1}{N}$$

$$\log \frac{1}{N} = \frac{4 \times 0.693}{2.303 \times 10} = 0.12036$$

$$\log N = -0.12036 = \bar{1}.87964$$

$$N = 7.575 \times 10^{-1} \text{ g atoms}$$

$$\therefore \text{No. of atoms} = 7.575 \times 10^{-1} \times 6.023 \times 10^{23} \text{ atoms} = 4.56 \times 10^{23} \text{ atoms}$$

64. For the Paschen series the values of  $n_1$  and  $n_2$  in the expression  $\Delta E = Rhc \left( \frac{1}{n_1^2} - \frac{1}{n_2^2} \right)$  are  
 (A)  $n_1=1, n_2=2, 3, 4, \dots$  (B)  $n_1=2, n_2=3, 4, 5, \dots$  (C)  $n_1=3, n_2=4, 5, 6, \dots$  (D)  $n_1=4, n_2=5, 6, 7, \dots$

**Ans : (C)**

**Hints :** In Paschen series electron shifting to third shell i.e.,  $n_1 = 3$  to  $n_2 = 4, 5, 6, \dots$

65. Under which of the following condition is the relation  $\Delta H = \Delta E + P\Delta V$  valid for a closed system?  
 (A) Constant Pressure (B) Constant temperature  
 (C) Constant temperature and pressure (D) Constant temperature, pressure and composition

**Ans : (A)**

**Hints :** This is applicable when pressure remains constant.

66. An organic compound made of C, H and N contains 20% nitrogen. Its molecular weight is :  
 (A) 70 (B) 140 (C) 100 (D) 65

**Ans : (A)**

**Hints :** Nitrogen at. wt. = 14 in a molecule minimum one atom of N is present

i.e., 20%  $\equiv 14$

Molecular weight = 70

100%  $\equiv 14 \times 5 = 70$

67. In Cu-ammonia complex, the state of hybridization of  $\text{Cu}^{+2}$  is  
 (A)  $sp^3$  (B)  $d^3s$  (C)  $sp^2f$  (D)  $dsp^2$

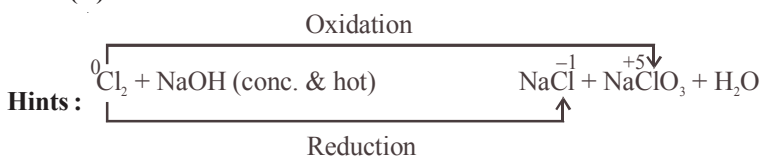
**Ans : (D)**

**Hints :** In  $[\text{Cu}(\text{NH}_3)_4]^+$

$\text{Cu}^{+2}$  is in a state of  $dsp^2$  hybridization and shape of the complex is square planar. (One  $e^-$  is excited from  $3d$  to  $4p$  during complex formation)

68. The reaction that takes place when  $\text{Cl}_2$  gas is passed through conc. NaOH solution is :  
 (A) Oxidation (B) Reduction (C) Displacement (D) Disproportionation

**Ans : (D)**



Hence the reaction is disproportionation

69. "Electron" is an alloy of  
 (A) Mg and Zn (B) Fe and Mg (C) Ni and Zn (D) Al and Zn

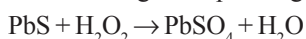
**Ans : (A)**

**Hints :** Electron is an alloy of Mg(95%) + Zn(4.5%) and Cu(0.5%)

70. Blackened oil painting can be restored into original form by the action of :  
 (A) Chlorine (B)  $\text{BaO}_2$  (C)  $\text{H}_2\text{O}_2$  (D)  $\text{MnO}_2$

**Ans : (C)**

**Hints :** Blackening of oil painting is due to PbS which is oxidised by  $\text{H}_2\text{O}_2$  to form white  $\text{PbSO}_4$



(Black) (white)

71. Of the following acids the one which has the capability to form complex compound and also possesses oxidizing and reducing properties is :

(A)  $\text{HNO}_3$  (B)  $\text{HNO}_2$  (C)  $\text{HCOOH}$  (D)  $\text{HCN}$

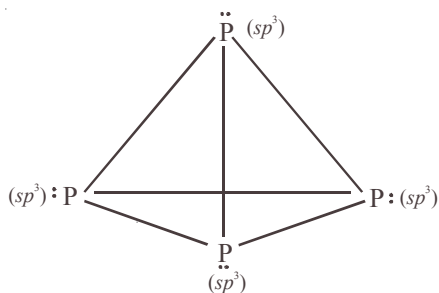
**Ans : (B)**  $\text{HNO}_2^{\pm 3}$

**Hints :** Here oxidation state of N lies between -3 to +5

72. Atoms in a  $P_4$  molecule of white phosphorus are arranged regularly in the following way :
- (A) at the corners of a cube (B) at the corners of an octahedron  
 (C) at the corners of a tetrahedron (D) at the centre and corners of a tetrahedron

Ans : (C)

Hints :

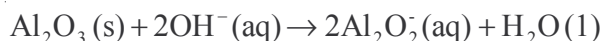


73. Which of the following statements is not correct
- (A) Silicon is extensively used as a semiconductor (B) Carborundum is SiC  
 (C) Silicon occurs in free state in nature (D) Mica contains the element silicon

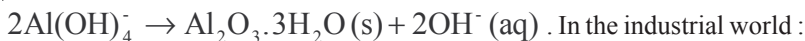
Ans : (C)

Hints : Silicon exist in nature in combined state as  $SiO_2$

74. In aluminium extraction by the Bayer process, alumina is extracted from bauxite by sodium hydroxide at high temperature and pressures :

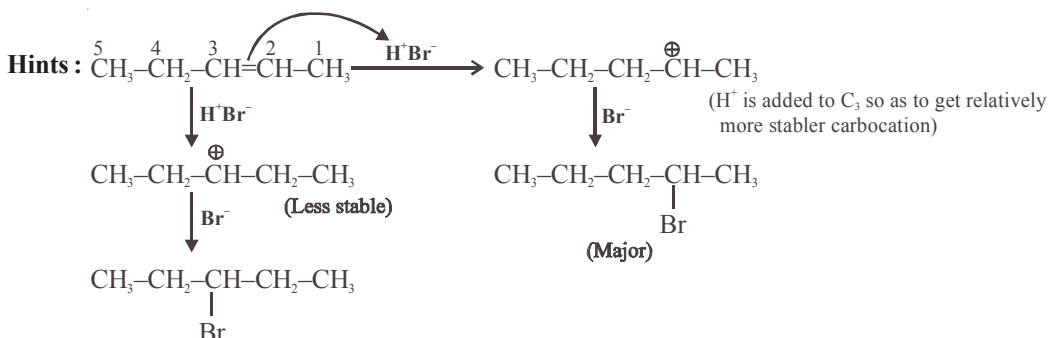


Solid impurities such as  $Fe_2O_3$  and  $SiO_2$  are removed and then  $Al(OH)_4^-$  is reprecipitated :



- (A) Carbon dioxide is added to precipitate the alumina  
 (B) Temperature and pressure are dropped and the supersaturated solution seeded  
 (C) Both (A) and (B) are practised  
 (D) The water is evaporated
- Ans : (B)
75. The addition of HBr to 2-pentene gives
- (A) 2-bromopentane only (B) 3-bromopentane only  
 (C) 2-bromopentane and 3-bromopentane (D) 1-bromopentane and 3-bromopentane

Ans : (C)

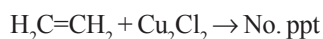


76. Ethelene can be separated from acetylene by passing the mixture through :  
 (A) fuming  $\text{H}_2\text{SO}_4$  (B) pyrogallol (C) ammoniacal  $\text{Cu}_2\text{Cl}_2$  (D) Charcoal powder

Ans : (C)



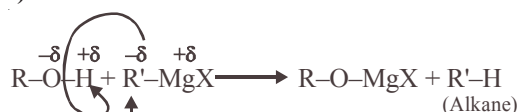
Red ppt.



77. Reaction of  $\text{R OH}$  with  $\text{R' MgX}$  produces :

- (A)  $\text{RH}$  (B)  $\text{R' H}$  (C)  $\text{R - R}$  (D)  $\text{R' - R'}$

Ans : (B)



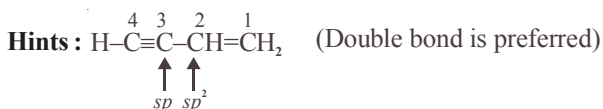
Hints :

↑ Weakly acidic H  
 ↑ Acts as base

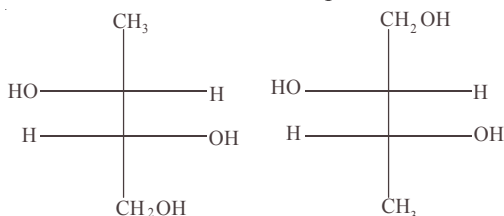
78. In the compound  $\text{HC}\equiv\text{C}-\text{CH}=\text{CH}_2$  the hybridization of C-2 and C-3 carbons are respectively :

- (A)  $\text{sp}^3$  &  $\text{sp}^3$  (B)  $\text{sp}^2$  &  $\text{sp}^3$  (C)  $\text{sp}^2$  &  $\text{sp}$  (D)  $\text{sp}^3$  &  $\text{sp}$

Ans : (C)

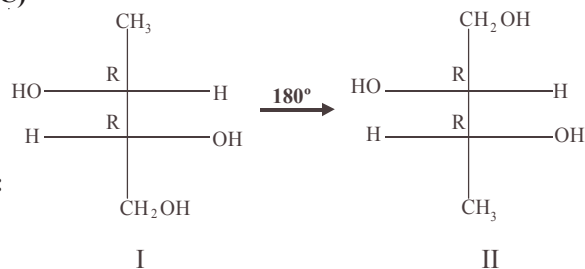


79. The two structures written below represent



- (A) pair of diastereomers (B) pair of enantiomers (C) same molecule (D) both are optically inactive

Ans : (C)



I & II are same Fischer projection because  $180^\circ$  rotation doesn't change configuration

80. Which of the following carbocations will be most stable ?

- (A)  $\text{Ph}_3\text{C}^+$  (B)  $\text{CH}_3-\text{C}^+\text{H}_3$  (C)  $(\text{CH}_3)_2\text{C}^+\text{H}$  (D)  $\text{CH}_2=\text{CH}-\text{C}^+\text{H}_2$

Ans : (A)



**PHYSICS**

**SECTION-II**

- 1 The displacement  $x$  of a particle at time  $t$  moving under a constant force is  $t = \sqrt{x} + 3$ ,  $x$  in meters,  $t$  in seconds. Find the work done by the force in the interval from  $t = 0$  to  $t = 6$  second.

A.  $t = \sqrt{x} + 3 \Rightarrow x = (t - 3)^2 \Rightarrow v = 2(t - 3)$   
 $v$  at  $t = 0$ ,  $-6$  m/s  
 $v$  at  $t = 6$  sec.,  $6$  m/s  
 change in KE is zero  $\Rightarrow$  work done = 0

- 2 Calculate the distance above and below the surface of the earth at which the acceleration due to gravity is the same

A.  $\frac{GM}{(R+h)^2} = \frac{GM(R-h)}{R^3}$

on solving we get  
 $-Rh + R^2 - h^2 = 0$

$$h = \frac{-R + \sqrt{R^2 + 4R^2}}{2} = \frac{(\sqrt{5} - 1)R}{2}$$

- 3 A ray of light travelling inside a rectangular glass block of refractive index  $\sqrt{2}$  is incident on the glass-air surface at an angle of incidence of  $45^\circ$ . Show that the ray will emerge into the air at an angle of refraction equal to  $90^\circ$

A. Given  $C = 45^\circ$

$$\sin c = \frac{1}{\mu} = \frac{1}{\sqrt{2}} = \sin 45^\circ$$

So the ray will graze the interface after refraction at an angle of  $90^\circ$

- 4 Two cells each of same e.m.f 'e' but of internal resistances  $r_1$  and  $r_2$  are connected in series through an external resistance  $R$ . If the potential difference between the ends of the first cell is zero, what will be the value of  $R$  in terms  $r_1$  and  $r_2$  ?

A.  $I = \frac{2e}{r_1 + r_2 + R}$  ; now  $e - Ir_1 = 0$   
 $\Rightarrow r_2 - r_1 + R = 0, R = (r_1 - r_2)$

- 5 At time  $t = 0$ , a radioactive sample has a mass of 10 gm. Calculate the expected mass of radioactive sample after two successive mean lives.

A. Two successive mean lives =  $\frac{2}{\lambda}$

$$\text{No. of nuclei after two mean lives} = N_0 e^{-(\lambda)\left(\frac{2}{\lambda}\right)} = \frac{N_0}{e^2}$$

$$\text{Therefore mass} = \frac{10}{e^2} \text{ gm}$$



## CHEMISTRY

### SECTION-II

6 Calculate the number of  $H^+$  ion present in 1 ml of a solution whose pH is 10.

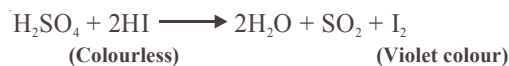
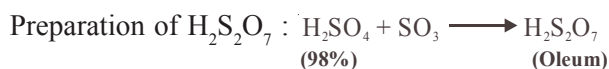
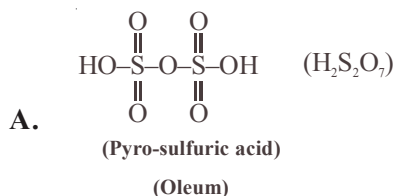
A.  $pH = 10$

$$[H^+] = 10^{-10} \text{ M}$$

In 1000 ml solution there are  $6.023 \times 10^{13} H^+$  ions

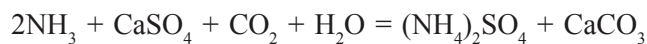
In 1 ml solution there are  $6.023 \times 10^{10} H^+$  ions

7 Give the structure of pyro-sulfuric acid. How would you prepare it? What would you observe when colourless HI is added to pyro-sulfuric acid?

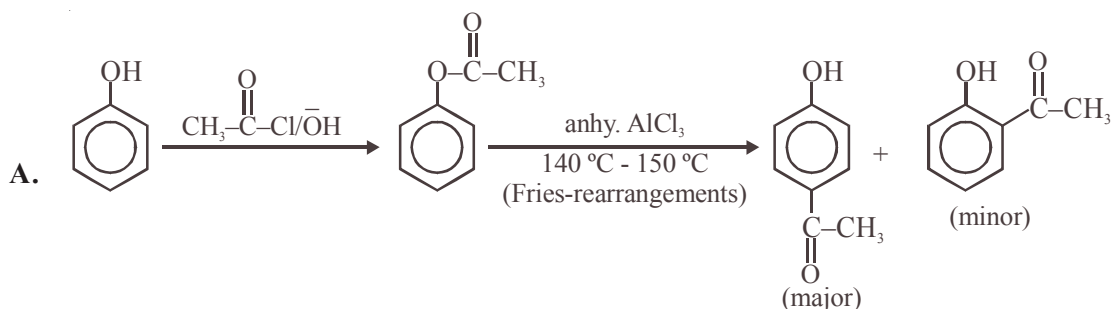


8 Write with a balanced chemical equation how gypsum is used for the conversion of ammonia into ammonium sulfate without using  $\text{H}_2\text{SO}_4$ .

A. Balanced reaction is



9 Convert phenol to p-hydroxy acetophenone in not more than 2 steps.



10 An organic compound 'A' on treatment with ammoniacal silver nitrate gives metallic silver and produces a yellow crystalline precipitate of molecular formula  $\text{C}_9\text{H}_{10}\text{N}_4\text{O}_4$ , on treatment with Brady's reagent. Give the structure of the organic compound 'A'.

A. Compound (A) is an aldehyde. It should be propanal  $\text{CH}_3\text{CH}_2\text{CHO}$

Reactions :

