




















Practice, Learn and Achieve
Your Goal with Prepp

SSC CHSL Exam

Tier I Previous Paper

Simplifying
Government Exams

 SSC CHSL	 IAS EXAM	 RRB NTPC	 NTSE	 CDS
 SSC CGL	 CBSE UGC NET	 IBPS PO	 NDA	
 SBI PO	 IBPS CLERK	 AFCAT	 SSC JE	 CTET
 CSIR UGC NET	 CAPF	 IBPS RRB		

www.prepp.in

101. In the following question, some part of the sentence may have errors. Find out which part of the sentence has an error and select the appropriate option. If a sentence is free from error, select 'No Error'.
She has (1)/ reduced her (2)/consumption to considerably (3)/No error (4)
- A. 1 B. 2
C. 3 D. 4

Ans. C

102. In the following question, some part of the sentence may have errors. Find out which part of the sentence has an error and select the appropriate option. If a sentence is free from error, select 'No Error'.
Liquid water cannot exist on the surface of Mars as to low(1)/atmospheric pressure, which is less than 1% of Earth's (2)/except at the lowest elevations for short periods.(3)/No error(4)
- A. 1 B. 2
C. 3 D. 4

Ans. A

103. In the following question, the sentence given with blank to be filled in with an appropriate word. Select the correct alternative out of the four and indicate it by selective the appropriate option.
That is _____ cars I know.
- A. the worst
B. worst
C. mostly worst
D. one of the worst

Ans. C

104. In the following question, the sentence given with blank to be filled in with an appropriate word. Select the correct alternative out of the four and indicate it by selecting the appropriate option.
The _____ of many archaic and dilatory procedures have proved to be extremely damaging to our governance and society
- A. caution
B. translation
C. imposition
D. revolution

Ans. C

105. In the following question, out of the given four alternatives, select the one which best expresses the meaning of the given word.
Curtail
- A. Prolong
B. Downsize
C. Lengthen
D. Extend

Ans. C

106. In the following question, out of the given four alternatives, select the one which best expresses the meaning of the given word.
Inference
- A. Beginning
B. Conclusion
C. Preparation
D. Discovery

Ans. B

107. In the following question, out of the given four alternative, select the one which is opposite in meaning of the given word.
Consensus
- A. Accord
B. Discord
C. Consent
D. Unity

Ans. B

108. In the following question, out of the given four alternatives, select the one which is opposite in meaning of the given word.
Mould
- A. Genuine
B. Shape
C. Slice
D. Sculpt

Ans. A

109. Rearrange the parts of the sentence in correct order.
In developing countries today
P : urban health conditions
Q : than rural health conditions
R : seem to be better
- A. PRQ B. RQP
C. PQR D. QRP

Ans. A

110. A sentence has been given in Active/Passive Voice. Out of four given alternatives, select the one which best express the same sentence in passive/Active Voice.
The workers are building the house.

- A. The house was being built by the workers.
- B. The house was built by the workers.
- C. The house is built by the workers.
- D. The house is being built by the workers.

Ans. D

111. A sentence has been given in Direct/Indirect Speech. Out of the four given alternatives, select the one which best expresses the same sentence in Indirect/Direct Speech. Sneha said to Arjun, "Go away."

- A. Sneha ordered Arjun to go away.
- B. Sneha asked Arjun that he should go away.
- C. Sneha say to Arjun to go away.
- D. Sneha inquired Arjun to go away.

Ans. A

112. In the following question, a word has been written in four different ways out of which only one is correctly spelt. Select the correctly spelt word.

- A. Aggrression
- B. Aggrresion
- C. Aggression
- D. Aggression

Ans. C

113. In the following passage, some of the words have been left out. Read the passage carefully and select the correct answer for the given blank out of the four alternatives.

When the kerosene burned, the fuel in the tank below would be _____ pressure, and _____ a small circular flame would appear in the burner. The valve had to be opened to let more kerosene vapour to the burner and pumping resumed. With the increase in pressure, the burner flame would spread _____ a loud noise. To lower the flame, the valve had to be _____ opened to reduce the pressure and then tightened until the desired flame size was achieved. _____ you wanted the flame to be bigger, you had to hit the piston again. Pump stoves are still in vogue.

below would be _____ pressure

- A. inside
- B. into
- C. about
- D. under

Ans. B

14. In the following passage, some of the words have been left out. Read the passage carefully and select the correct answer for the given blank out of the four alternatives.

When the kerosene burned, the fuel in the tank below would be _____ pressure, and _____ a small circular flame would appear in the burner. The valve had to be opened to let more kerosene vapour to the burner and pumping resumed. With the increase in pressure, the burner flame would spread _____ a loud noise. To lower the flame, the valve had to be _____ opened to reduce the pressure and then tightened until the desired flame size was achieved. _____ you wanted the flame to be bigger, you had to hit the piston again. Pump stoves are still in vogue. and _____ a small circular flame

- A. Slow
- B. Slowly
- C. Slower
- D. Slowest

Ans. B

115. In the following passage, some of the words have been left out. Read the passage carefully and select the correct answer for the given blank out of the four alternatives.

When the kerosene burned, the fuel in the tank below would be _____ pressure, and _____ a small circular flame would appear in the burner. The valve had to be opened to let more kerosene vapour to the burner and pumping resumed. With the increase in pressure, the burner flame would spread _____ a loud noise. To lower the flame, the valve had to be _____ opened to reduce the pressure and then tightened until the desired flame size was achieved. _____ you wanted the flame to be bigger, you had to hit the piston again. Pump stoves are still in vogue. would spread _____ a loud noise.

- A. within
- B. with
- C. during
- D. at

Ans. B

116. In the following passage, some of the words have been left out. Read the passage carefully and select the correct answer for the given blank out of the four alternatives.

When the kerosene burned, the fuel in the tank below would be _____ pressure, and _____ a small circular flame would appear in the burner. The valve had to be opened to let more kerosene vapour to the burner and pumping resumed. With the increase in pressure, the burner flame would spread _____ a loud noise. To lower the flame, the valve had to be _____ opened to reduce the pressure and then tightened until the desired flame size was achieved. _____ you wanted the flame to be bigger, you had to hit the piston again. Pump stoves are still in vogue. had to be _____ opened to reduce

- A. partly B. some
C. everything D. none

Ans. A

117. In the following passage, some of the words have been left out. Read the passage carefully and select the correct answer for the given blank out of the four alternatives.

_____ be opened to let more kerosene vapour to the burner and pumping resumed. With the increase in pressure, the burner flame would spread _____ a loud noise. To lower the flame, the valve had to be _____ opened to reduce the pressure and then tightened until the desired flame size was achieved. _____ you wanted the flame to be bigger, you had to hit the piston again. Pump stoves are still in vogue. _____ was achieved. _____ you wanted the flame

- A. if B. Nor
C. So D. Thus

Ans. A

118. In the following question, out of the four alternatives, select the alternative which best expresses the meaning of the idiom/phrase.

A bone of contention

- A. The only part to which two arguing parties agree.
B. An issue over which there is continuing disagreement.
C. A very expensive inherited property.
D. To be happy with only a few things.

Ans. B

119. In the following question, out of the four alternatives, select the alternative which best expresses the meaning of the idiom/phrase.

Zip your lip

- A. Keep quiet about something.
B. To talk fast.
C. To not think before speaking.
D. The silence before a storm.

Ans. A

120. In the following question, out of the four alternatives, select the alternative which is the best substitute of the words/sentence.

A military or political group that rules a country after taking power by force

- A. junta
B. suffrage
C. Emancipation
D. Egalitarianism

Ans. C

121. In the following question, out of the four alternatives, select the alternative which is the best substitute of the words/sentence.

A person who lives outside his native country

- A. Indigenous
B. Natal
C. Expatriate
D. Intrinsic

Ans. C

122. In the following question, out of the four alternatives, select the alternative which will improve the bracketed part of the sentence. In case no improvement is needed, select "no improvement".

At the micro level, the dialectical process of development in India (**has now heading**) towards another direction.

- A. had now heading
B. now heading
C. is now heading
D. no improvement

Ans. C

123. In the following question, out of the four alternatives, select the alternative which will improve the bracketed part of the sentence. In case no improvement is needed, select "no improvement".

I wondered what one would have thought some 40 years ago if you (**had said**) you could heat liquid using a plastic container.

- A. having said
B. had say
C. have saying
D. no improvement

Ans. A

124. The question below consists of a set of labelled sentences. Out of the four options given, select the most logical

138. In a certain code language, '-' represents 'x', '÷' represents '+', '+' represents '÷' and 'x' represents '-'. Find out the answer to the following question.

$$2 - 12 + 10 \times 5 \div 12 = ?$$

- A. 32 B. 8
C. 4 D. 14

Ans. D

139. The following equation is incorrect. Which two signs should be interchanged to correct the equation?

$$1 \div 14 \times 30 + 20 - 10 = 12$$

- A. - and +
B. ÷ and x
C. x and -
D. ÷ and +

Ans. A

140. If $8*2 = 3$, $14*18 = -2$ and $18*2 = 8$, then find the value of $14*10 = ?$

- A. 2 B. -5
C. -2 D. 6

Ans. A

41. Which of the following terms follows the trend of the given list?

XxXXXXX, XXxXXXX, XXXxXXX,
XXXXxXX, XXXXXxX, _____.

- A. xXXXXXXXX
B. XxXXXXX
C. XXXXXXXx
D. XXxXXXX

Ans. C

142. An auto-rickshaw picks a passenger and travels North 6.5 km, then it turns to its left and rides for another 1.5 km, then it turns South and rides for 2.5 km, then it turns to its left and rides 1.5 km. Where is the auto now with respect to its starting position?

- A. 9 km North
B. 4 km North
C. 4 km South
D. 9 km South

Ans. B

143. In the question two statements are given, followed by two conclusions, I and II. You have to consider the statements to be true even if it seems to be at variance from commonly known facts. You have to decide which of the given conclusions, if any, follows from the given statements.

Statement I: No bikes are two-wheelers

Statement II: All wheels are bikes

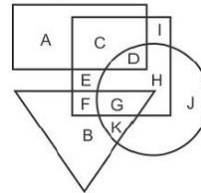
Conclusion I: No two-wheelers are wheels

Conclusion II: All wheels are two-wheelers

- A. Only conclusion I follows
B. Only conclusion II follows
C. Both conclusions I and follow
D. Neither conclusion I nor conclusion II follows

Ans. B

144. In the following figure, rectangle represents Floral designers, triangle represents Sculptors and square represents Americans. Which set of letters represents Americans who are either Floral or Sculptors?



- A. FGDH B. FGK
C. FHJD D. GK

Ans. A

145. A series is given with one term missing. Select the correct alternative from the given ones that will complete the series.

MPQ, NQR, ORS, ?

- A. QTU B. QST
C. PST D. PTU

Ans. C

146. In the following question, select the missing number from the given series.

10,12,14,16,18,?

- A. 22 B. 24
C. 20 D. 26

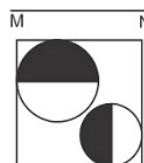
Ans. C

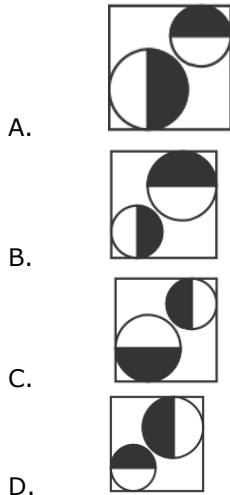
147. In the following question, four groups of three numbers are given. In each group the second and third number are related to the first number by a Logic/Rule/Relation. Three are similar on basis of same Logic/Rule/Relation. Select the odd one out from the given alternatives.

- A. (2,3,4)
B. (4,5,6)
C. (6,7,8)
D. (4,6,8)

Ans. D

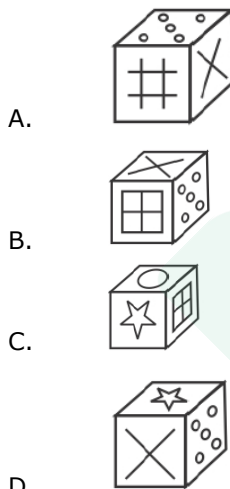
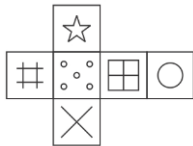
48. If a mirror is placed on the line MN, then which of the answer figures is the right image of the given figure?





Ans. 149.

Which of the following cube in the answer figure cannot be made based on the unfolded cube in the question figure?



Ans. 50.

A word is represented by only set of numbers as given by any one of the alternatives. The sets of numbers given in the alternatives are represented by two classes of alphabets as shown in the given two matrices. The columns and rows of Matrix-I are numbered from 0 to 4 and that of Matrix-II are numbered from 5 to 9. A letter matrix can be represented first by its row by its row and next by its column, for example 'H' can be represented by 21,34 etc and 'Q' can be represented by 95,86 etc.

Similarly, you have to identify the set for the word 'BURN'.

Matrix I					
	0	1	2	3	4
0	M	J	I	J	F
1	B	F	H	F	B
2	L	D	A	B	A
3	K	C	C	D	H
4	B	F	K	I	K

Matrix II					
	5	6	7	8	9
5	Z	X	W	O	Z
6	R	Y	S	W	O
7	Y	P	S	W	R
8	Y	Q	R	Z	Y
9	N	Z	S	U	S

- A. 43,69,13,56
 B. 30,75,11,97
 C. 44,79,11,57
 D. 44,79,11,57

Ans. C

151. Find the common factor of $(37^{57}+43^{57})$ and $(37^{37}+43^{37})$

- A. $(43 - 37)$
 B. $(43+37)$
 C. $(37^{37}+43^{37})$
 D. 10

Ans. D

152. Calculate the value of $(61681 \times 61681 - 31681 \times 31681)$

30000

- A. 93352
 B. 94362
 C. 93362
 D. 95362

Ans. A

153. For which value of 'g' the linear graph of $6x + 12y + 9 = 0$ and $2x + gy + 3 = 0$ has infinite number of solutions?

- A. 3
 B. 4
 C. 6
 D. 9

Ans. B

154. What is the area (in square units) of the figure enclosed by the graphs of the lines $x = -4$, $x = 2$, $y = -2$ and $y = 3$?

- A. 12
 B. 24
 C. 15
 D. 60

Ans. C

155. AB is a chord of the circle and its center is "O". ON is perpendicular to AB. If the length of AB=20 cm, ON=($2\sqrt{11}$) cm, find the radius (in cm) of the circle.

- A. 10
 B. 12
 C. 13
 D. 15

- Ans. B
156. The largest chord of the circle has a length of 20.4 cm. The radius of the circle will be _____.
A. 10.2 cm
B. greater than 10.2 cm
C. greater than and equal to 10.2 cm
D. less than 10.2 cm

- Ans. A
157. Length and breadth of a rectangle are increased by 40% and 70% respectively. What will be the percentage increase in the area of rectangle?
A. 118 B. 110
C. 138 D. 128

- Ans. C
158. Rs 6300 is divided among A, B and C in the ratio of $1/2 : 1 : 3/5$. What is the share (in Rs) of B?
A. 3300 B. 2700
C. 3000 D. 4200

- Ans. C
159. U and V started a business by investing amounts Rs 184000 and Rs 224000 respectively. If U's share in the profit received at the end of year is Rs 20700, then what will be the total profit (in Rs) earned by them together?

- A. 43200
B. 45900
C. 52300
D. 56400

- Ans. B
160. What is the average of first 19 odd numbers?
A. 9.5
B. 15.5
C. 19 D. 38

- Ans. C
161. A sum becomes Rs 1392 in 2 years and Rs 1488 in 3 years at simple interest. What is the rate (in percentage) of interest per annum?
A. 8 B. 10
C. 12 D. 8.5

- Ans. A
162. Selling price of a table is Rs 2808. If profit percentage is 17%, then what is the cost price (in Rs) of table?
A. 2288 B. 2300
C. 2400 D. 3285

- Ans. C
163. The marked price of a chair is 40% more than its cost price. If the chair is sold for Rs 520 after a discount of Rs 40, then what will be the profit percentage?
A. 33 B. 40
C. 25 D. 30

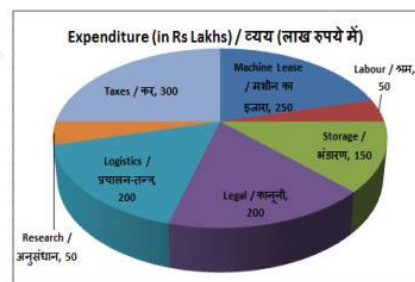
Ans. D

164. Which of the following statement(s) is/are **TRUE**?
I. $2\sqrt{3} > 3\sqrt{2}$
II. $4\sqrt{2} > 2\sqrt{8}$
A. Only I
B. Only II
C. Neither I nor II
D. Both I and II

- Ans. C
165. X, Y and Z can do a piece of work in 30, 40 and 50 days respectively. All three of them began the work together but Y left 4 days before completion of the work. In how many days was the work completed?
A. 660/47
B. 640/47
C. 680/47
D. 665/47

- Ans. A
166. A train is moving at the speed of 72 km/hr. How many seconds will it take to cover a distance of 1400 m ?
A. 70 B. 80
C. 72 D. 84

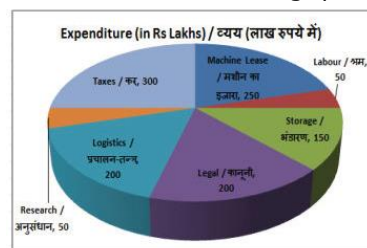
- Ans. A
167. The pie chart shows the breakup of expenditure of a mining company for the year 2017. Study the diagram and answer the following questions.



The second highest expenditure is for which item?

- A. Labour
B. Storage
C. Legal
D. Machine Lease

- Ans. D
168. The pie chart shows the breakup of expenditure of a mining company for the year 2017. Study the diagram and answer the following questions.

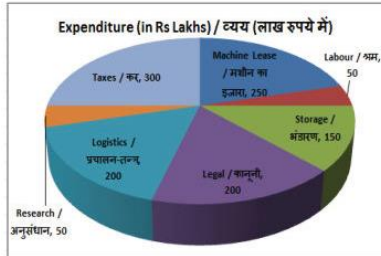


What is the total expenditure (in Rs lakhs)?

- A. 1200 B. 900
C. 1000 D. 1100

Ans. 169. A

The pie chart shows the breakup of expenditure of a mining company for the year 2017. Study the diagram and answer the following questions.

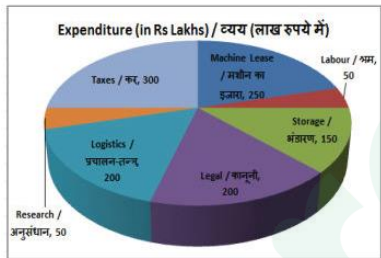


The measure of the central angle of the sector representing Machine Lease is _____ degrees.

- A. 70 B. 75
C. 80 D. 90

Ans. 70. B

The pie chart shows the breakup of expenditure of a mining company for the year 2017. Study the diagram and answer the following questions.



Expenditure on Labour and Research constitute what percent of total expenditure?

- A. 10%
B. 12%
C. 7.5%
D. 8.33%

Ans. 171. D

The length of the diagonal and the breadth of a rectangle are 17 cm and 8 cm respectively. Find its perimeter (in cm).

- A. 92 B. 46
C. 42 D. 84

Ans. 172. B

The area of a semicircle is 1925 cm². Calculate its perimeter (in cm).

- A. 360 B. 80
C. 160 D. 180

Ans. 173. D

The surface area of a sphere is 5544 cm². Find its diameter (in cm).

- A. 42 B. 21
C. 84 D. 63

Ans. A

174. ΔABC is right angled at B. If $m\angle A = 45^\circ$, then find the value of $(\operatorname{cosec} C + 1/\sqrt{3})$.

- A. $(3\sqrt{2}+1)/3$
B. $(2+\sqrt{3})/2$
C. $5/\sqrt{3}$
D. $(\sqrt{6}+1)/\sqrt{3}$

Ans. D

175. In ΔUVW measure of angle V is 90° . If $\operatorname{cosec} U = 13/12$, and $UV = 2.5\text{cm}$, then what is the length (in cm) of side VW?

- A. 6.5 B. 6
C. 4 D. 5.6

Ans. B

176. In which of the following types of economy are the factors of production owned individually?

- A. Capitalist
B. Socialist
C. Mixed
D. Both Capitalist and Socialist

Ans. A

177. Which committee was set up to review the concept of the poverty line?

- A. S Tendulkar Committee
B. Lakdawala Committee
C. Wanchoo Committee
D. Dutt Committee

Ans. A

178. Which of the following places presents the oldest evidence of Neolithic Era?

- A. Chind
B. Mehrgarh
C. Burghome
D. Daimabad

Ans. B

179. Which mosque is considered to be the style of Bengal style in Agra?

- A. Nagina Masjid
B. Moti Masjid
C. Jama Masjid
D. Badshai Masjid

Ans. A

180. According to the distance of planets from the Sun, which of the following order is correct?

- A. Mercury, Venus, Earth, Mars
B. Mercury, Earth, Mars, Venus
C. Mercury, Mars, Earth, Venus
D. Mercury, Mars, Venus, Earth

Ans. A

181. How many states of India have sea-shore?

- A. 7 B. 8
C. 9 D. 10

Ans. C

82. Amir Khusrow was the disciple of whom?

- A. Mirza Ghiyas Beg
B. Nizamuddin Auliya
C. Asadulla Beg
D. Sheikh Salim Chisti
- Ans. B
183. Which year has been set as goal for completing the Mumbai-Ahmedabad bullet train project operated with the help of Japan?
A. 2022 B. 2023
C. 2024 D. 2025
- Ans. B
184. Krishna Sobti is the recipient of the 53rd Jnanpith Award. Which of the following books has not been written by her?
A. Daar Se Bichhudi
B. Mitro Marjani
C. Zindaginama
D. Vishw Mithok Sarit Sagar
- Ans. D
185. Which of the following countries border does not touch China?
A. Cambodia
B. Laos
C. Vietnam
D. Myanmar
- Ans. A
186. Rayon is obtained from which among the following?
A. Silk
B. Wood pulp
C. Wool
D. Cotton
- Ans. B
187. Which of the following can be beaten and converted into thin sheets?
A. Zinc
B. Phosphorus
C. Sulphur
D. Oxygen
- Ans. A
188. prime Minister of India is de-facto head of which of the following bodies?
I. NITI Aayog
II. National Integration Council
III. Indian Board of Wildlife
A. Only I
B. Only II
C. Both II and III
D. All I,II and III
- Ans. D
189. Which type of city administration controls larger urban area?
A. Nagar Panchayat
B. Municipal Council
C. Municipal Corporation
D. No option is correct
- Ans. C
190. Which among the following is **NOT** an event during the photosynthesis process?
A. Absorption of light energy by chlorophyll
B. Conversion of light energy to chemical energy
C. Splitting of water molecules into hydrogen and oxygen
D. Oxidation of carbon dioxide to carbohydrates
- Ans. D
191. The smallest blood vessels which are one-cell thick, are called _____.
A. Vena Cava
B. arteries
C. Venis
D. capillaries.
- Ans. D
192. In September 2017, who lauched 'Pradhan Mantri LPG panchyat yojna'?
A. Narendra Modi
B. Dhamendra Pradhan
C. Piyush Goyal
D. R.K. Singh
- Ans. A
193. What are the names of the two identical long tailed macaques cloned by the Chinese Scientists?
A. Long Hong and Zhua Zhua
B. Zhong-Zhong and Hua Hua
C. Tailong and Shanua
D. Rongla and Shamone
- Ans. B
194. India was able to achieve the fiscal deficit target for the Financial Year 2016-17. It was how much percent of GDP?
A. 3.50%
B. 4.20%
C. 3.00%
D. 2.50%
- Ans. A
195. On 10 April 2017, Lok Sabha Passed the Motor Vehicles Act (Amendment) Bill, 2016. Under the new provisions, the compensation for death increased from Rs 25,000 to _____.
A. Rs 2 lakh or more
B. Rs 5 lakh or more
C. Rs 10 lakh or more
D. Rs 10 lakh or more
- Ans. A
196. Find the current (in A) when a charge of 500 Coulomb flows in 25 seconds.
A. 12500
B. 20
C. 40
D. 6250
- Ans. A

197. During _____ motion of an object along a straight line, the velocity remains constant with time.
A. Linear
B. transiational
C. uniform
D. equilibrium

Ans. C

198. The tropical region has generally a hot climate because of its location around the _____.
A. poles
B. southern hemisphere
C. high altitudes
D. equator

Ans. D

199. Which of the statements given below are correct?
A) United Arab Emirates hosted the Badminton 2017 BWF World Senior Championships.
B) Johanna Konta won the Tennis 2017 Miami Open Women's Singles.
C) Grigor Dimitrov won the Tennis 2017 US Open Men's Singles.
A. Only A
B. Only B
C. Only C
D. A, B and C

Ans. B

200. In Microsoft Word, under character formatting _____ is used to apply colors to the characters.
A. Font Style
B. Font colour
C. Effects
D. Size

Ans. B



Latest Sarkari jobs, Govt Exam alerts, Results and Vacancies

- ▶ Latest News and Notification
- ▶ Exam Paper Analysis
- ▶ Topic-wise weightage
- ▶ Previous Year Papers with Answer Key
- ▶ Preparation Strategy & Subject-wise Books

To know more [Click Here](#)



www.prepp.in