



Practice, Learn and Achieve
Your Goal with Prepp

SSC CHSL Exam

Tier I Previous Paper

Simplifying
Government Exams

 SSC CHSL	 IAS EXAM	 RRB NTPC	 NTSE	 CDS
 SSC CGL	 CBSE UGC NET	 IBPS PO	 NDA	
 SBI PO	 IBPS CLERK	 AFCAT	 SSC JE	 CTET
 CSIR UGC NET	 CAPF	 IBPS RRB		

www.prepp.in

201. In the following question, some part of the sentence may have errors. Find out which part of the sentence has an error and select the appropriate option. If a sentence is free from error, select 'No Error'.

The first and decisive step **(1)**/ in the expansion of Europe overseas **(2)**/ was the conquest of Atlantic Ocean. **(3)**/ No error **(4)**

- A. 1. B. 2
C. 3. D. 4

Ans: C

202. In the following question, some part of the sentence may have errors. Find out which part of the sentence has an error and select the appropriate option. If a sentence is free from error, select 'No Error'.

The word 'Macabre' had been gained its significance from its **(1)**/ use in French as la danse macabre for the allegorical **(2)**/ representation of the universal power of death. **(3)**/ No error **(4)**

- A. 1. B. 2
C. 3. D. 4

Ans: A

203. In the following question, the sentence given with blank to be filled in with an appropriate word. Select the correct alternative out of the four and indicate it by selecting the appropriate option.

She was chatting _____ the cars.

- A. of B. about
C. with D. on

Ans: B

204. In the following question, the sentence given with blank to be filled in with an appropriate word. Select the correct alternative out of the four and indicate it by selecting the appropriate option.

Success is achieved twice, once in the mind and the second time in the _____ world.

- A. real B. virtual
C. fantasy D. artificial

Ans: A

205. In the following question, out of the given four alternatives, select the one which best expresses the meaning of the given word.

Naive

- A. Sarcastic B. Artful
C. Skeptical D. Ingenuous

Ans: D

206. In the following question, out of the given four alternatives, select the one which best expresses the meaning of the given word.

Surly

- A. Sweet B. Unfriendly

- C. Clear D. Pleasant

Ans: B

207. In the following question, out of the given four alternatives, select the one which is opposite in meaning of the given word.

Myopic

- A. Blind B. Biased
C. Careless D. Farsighted

Ans: D

208. In the following question, out of the given four alternatives, select the one which is opposite in meaning of the given word.

Defile

- A. Pollute B. Abuse
C. Shame D. Honour

Ans: D

209. Rearrange the parts of the sentence in correct order.

Attempts in India

P : honesty and more by blind faith

Q : by the government to validate traditional

R : medicine are driven less by

- A. QPR B. RPQ
C. QRP D. RQP

Ans: C

210. A sentence has been given in Active/Passive Voice. Out of the four given alternatives, select the one which best expresses the same sentence in Passive/Active Voice.

The officer cuts down the tree.

- A. The tree is cut down by the officer.
B. The tree got cut down by the officer.
C. The tree is cut by the officer.
D. The tree cut by the officer.

Ans: A

211. A sentence has been given in Direct/Indirect Speech. Out of the four given alternatives, select the one which best expresses the same sentence in Indirect/Direct Speech.

Raj said, "I am happy to be here this evening."

- A. Raj said that he was happy to be there that evening.
B. Raj was happy to be there this evening.
C. Raj said he was happy to be there this evening.
D. Raj says he is happy to be there.

Ans: A

212. In the following question, a word has been written in four different ways out of which only one is correctly spelt. Select the correctly spelt word.

- A. Glamorous B. Glamrous
C. Glamorous D. Gleamorous

Ans: C

- 213. In the following passage, some of the words have been left out. Read the passage carefully and select the correct answer for the given blank out of the four alternatives.**

The most powerful and the most perfect _____ of thought and feeling through the medium of oral language must be traced to the mastery of words. _____ is better suited to lead speakers and readers _____ English into an easy control of this language than the command of the phrase that perfectly expresses the thought. Every speaker's aim is to be heard and _____. A clear, crisp _____ holds an audience as by the spell of some irresistible power.

the most perfect _____ of thought and feeling

- A. express B. expressive
C. expressings D. expression

Ans: D

- 214. In the following passage, some of the words have been left out. Read the passage carefully and select the correct answer for the given blank out of the four alternatives.**

The most powerful and the most perfect _____ of thought and feeling through the medium of oral language must be traced to the mastery of words. _____ is better suited to lead speakers and readers _____ English into an easy control of this language than the command of the phrase that perfectly expresses the thought. Every speaker's aim is to be heard and _____. A clear, crisp _____ holds an audience as by the spell of some irresistible power.

mastery of words. _____ is better suited to lead

- A. No B. Not
C. None D. Nothing

Ans: D

- 215. In the following passage, some of the words have been left out. Read the passage carefully and select the correct answer for the given blank out of the four alternatives.**

The most powerful and the most perfect _____ of thought and feeling through the medium of oral language must be traced to the mastery of words. _____ is better

suited to lead speakers and readers _____ English into an easy control of this language than the command of the phrase that perfectly expresses the thought. Every speaker's aim is to be heard and _____. A clear, crisp _____ holds an audience as by the spell of some irresistible power.

and readers _____ English into an easy

- A. for B. of
C. from D. at

Ans: B

- 216. In the following passage, some of the words have been left out. Read the passage carefully and select the correct answer for the given blank out of the four alternatives.**

The most powerful and the most perfect _____ of thought and feeling through the medium of oral language must be traced to the mastery of words. _____ is better suited to lead speakers and readers _____ English into an easy control of this language than the command of the phrase that perfectly expresses the thought. Every speaker's aim is to be heard and _____. A clear, crisp _____ holds an audience as by the spell of some irresistible power.

aim is to be heard and _____.

A clear

- A. understand B. understandable
C. understood D. understandably

Ans: C

- 217. In the following passage, some of the words have been left out. Read the passage carefully and select the correct answer for the given blank out of the four alternatives.**

The most powerful and the most perfect _____ of thought and feeling through the medium of oral language must be traced to the mastery of words. _____ is better suited to lead speakers and readers _____ English into an easy control of this language than the command of the phrase that perfectly expresses the thought. Every speaker's aim is to be heard and _____. A clear, crisp _____ holds an audience as by the spell of some irresistible power.

crisp _____ holds an audience as

- A. articulate B. articulates
C. articulations D. articulation

Ans: D

218. In the following question, out of the four alternatives, select the alternative which best expresses the meaning of the idiom/phrase.

At the top of your lungs

- A. Be a habitual smoker.
B. Be breathless after an exhausting physical task.
C. Feel suffocated in a very crowded place.
D. Extremely loudly.

Ans: D

219. In the following question, out of the four alternatives, select the alternative which best expresses the meaning of the idiom/phrase.

The wheels have come off

- A. To use something so much that it wears out.
B. Things start to fail or go wrong, especially after a period of success.
C. To do a shoddy job which is destined to fail.
D. Make an excuse to avoid doing a task.

Ans: B

220. In the following question, out of the four alternatives, select the alternative which is the best substitute of the words/sentence.

An attractively tall, graceful, and dignified woman

- A. Terse B. Pithy
C. Sententious D. Statuesque

Ans: D

221. In the following question, out of the four alternatives, select the alternative which is the best substitute of the words/sentence.

The return of someone to his own country

- A. Repatriation B. Migrate
C. Emigrate D. Immigrate

Ans: A

222. In the following question, out of the four alternatives, select the alternative which will improve the bracketed part of the sentence. In case no improvement is needed, select "no improvement".

The doctor removed the eye patch and asked him how he **(were feeling)**.

- A. was felt B. has feeling
C. was feeling D. no improvement

Ans: C

223. In the following question, out of the four alternatives, select the alternative which will improve the bracketed part of the sentence. In case no improvement is needed, select "no improvement".

It is nothing less than magic which **(will transformed)** tiny teeny seeds into fruits of life.

- A. transform B. transforms
C. transforming D. no improvement

Ans: A

224. The question below consists of a set of labelled sentences. Out of the four options given, select the most logical order of the sentences to form a coherent paragraph.

Many a bird found

A- secure in the branches

B- safety in the trees and

C- built their nests, feeling

- A. BAC B. BCA
C. ACB D. ABC

Ans: B

225. In the following question, four words are given out of which one word is correctly spelt. Select the correctly spelt word.

- A. daclination B. declination
C. declination D. daclination

Ans: C

226. In the following question, select the related word pair from the given alternatives.

Start : End :: ? : ?

- A. Hot : Water B. Love : Care
C. Green : Go D. Up : Down

Ans: D

227. In the following question, select the related number pair from the given alternatives.

31 : 42 :: ? : ?

- A. 53 : 64 B. 47 : 59
C. 61 : 73 D. 44 : 34

Ans: A

228. In the following question, select the related letter/letters from the given alternatives.

FUT : JYX :: BUG : ?

- A. AYG B. FYK
C. LCK D. FAM

Ans: B

229. In the following question, select the odd word from the given alternatives.

- A. Ocean B. Sea
C. Desert D. River

Ans: C

230. In the following question, four number pairs are given. The number on left side of (-) is related to the number of the right side of (-) with some Log-

ic/Rule/Relation. Three are similar on basis of same Logic/Rule/Relation. Select the odd one out from the given alternatives.

- A. 101 - 105 B. 103 - 107
C. 102 - 106 D. 104 - 106

Ans: D

231. In the following question, select the odd letter/letters from the given alternatives.

- A. KQW B. RXD
C. BHN D. AGL

Ans: D

232. From the given alternatives, according to dictionary, which word will come at the LAST position?

1. Toast
2. Torpe do
3. Tounge
4. Trickle
5. Trick

- A. Trick B. Trickle
C. Tounge D. Torpedo

Ans: C

233. In the following question, select the missing number from the given series.

13, 17, 19, 23, 29, ?

- A. 33 B. 31
C. 35 D. 37

Ans: B

234. A series is given with one term missing. Select the correct alternative from the given ones that will complete the series.

UY, SV, QS, OP, ?

- A. NM B. ML
C. MM D. KL

Ans: C

235. L, M, N, O and P are sitting in a line facing east. L and M are sitting together. N is sitting at north end and O is sitting at south end. P is the neighbour of M and N. Who is third from north end?

- A. L B. O
C. M D. P

Ans: C

236. From the given alternatives, select the word which **CANNOT** be formed using the letters of the given word.

Corporate

- A. Poor B. Rate
C. Cat D. Prove

Ans: D

237. In a certain code language, "PRICE" is written as "GEKTR". How is "VALUE" written in that code language?

- A. FWNCX B. FNWDY
C. DWNCY D. GWNCX

Ans: D

238. In a certain code language, '-' represents '+', '+' represents 'x', 'x' represents '÷' and '÷' represents '-'. Find out the answer to the following question.

9 - 18 + 35 x 10 ÷ 30 = ?

- A. 44 B. 42
C. 40 D. 41

Ans: B

239. The following equation is incorrect. Which two signs should be interchanged to correct the equation?

20 ÷ 14 + 5 x 20 - 2 = 56

- A. + and × B. ÷ and -
C. + and ÷ D. - and +

Ans: B

240. If $16a1 = 8$, $14a6 = 42$ and $12a5 = 30$, then find the value of $2a6 = ?$

- A. 6 B. 18
C. 4 D. 10

Ans: A

241. Which of the following terms follows the trend of the given list?

XYZXYzYZ, XYZYzXYZ,
XYZYzXYZ, XYZxYZXYZ,
XYZXYZXYZ, _____.

- A. xYZXYZXYZ B. XYZXYzXYZ
C. XyZXYZXYZ D. XYZXYzXYZ

Ans: C

242. An insect walks 15 cm East, then it turns to its right and walks for another 20 cm. then it turns right and walks 4 cm, then it turns North and walks 20 cm, then finally it turns to its left and walks 2 cm. Where is the insect now with respect to its starting point.

- A. 9 cm East B. 21 cm East
C. 9 cm West D. 21 cm West

Ans: A

243. In the question two statements are given, followed by two conclusions, I and II. You have to consider the statements to be true even if it seems to be at variance from commonly known facts. You have to decide which of the given conclusions, if any, follows from the given statements.

Statement I: Some games are sports

Statement II: No exercise are games

Conclusion I: All sports are exercise

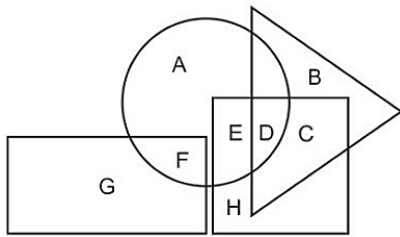
Conclusion II: Some exercise are sports

- A. Only conclusion I follows
B. Only conclusion II follows
C. Both conclusions I and II follow
D. Neither conclusion I nor conclusion II follows

Ans: D

244. In the following figure, rectangle represents Journalists, circle represents Art critics, triangle represents Campers

and square represents Mothers. Which set of letters represents Mothers who are Campers?



- A. DC B. BDCH
C. EDC D. HEB

Ans: A

245. A series is given with one term missing. Select the correct alternative from the given ones that will complete the series.

ENG, GQI, ITK, KWM, ?

- A. NAP B. MZO
C. MAO D. NZP

Ans: B

246. In the following question, select the missing number from the given series.

58, 61, 65, 70, ?, 83

- A. 77 B. 76
C. 78 D. 75

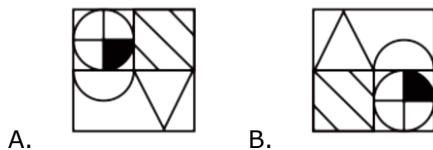
Ans: B

247. In the following question, four groups of three numbers are given. In each group the second and third number are related to the first number by a Logic/Rule/Relation. Three are similar on basis of same Logic/Rule/Relation. Select the odd one out from the given alternatives.

- A. (7, 14, 21) B. (5, 12, 19)
C. (3, 10, 17) D. (9, 16, 35)

Ans: D

248. If a mirror is placed on the line MN, then which of the answer figures is the right image of the given figure?

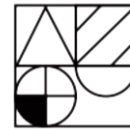


A.

B.



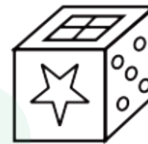
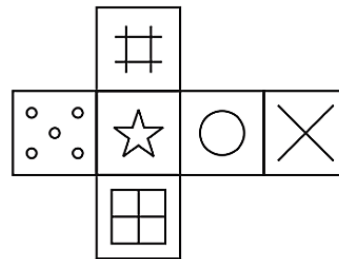
C.



D.

Ans: B

249. Which of the following cube in the answer figure cannot be made based on the unfolded cube in the question figure?



A.



B.



C.



D.

Ans: C

250. A word is represented by only one set of numbers as given in any one of the alternatives. The sets of numbers given in the alternatives are represented by two classes of alphabets as shown in the given two matrices. The columns and rows of Matrix-I are numbered from 0 to 4 and that of Matrix-II are numbered from 5 to 9. A letter from these matrices can be represented first by its row and next by its column, for example 'F' can be represented by 41, 24 etc and 'V' can be represented by 57, 78 etc. Similarly, you have to identify the set for the word 'MOCK'.

Matrix I आरेख - I					
	0	1	2	3	4
0	E	M	F	J	A
1	B	H	L	M	I
2	K	J	C	M	F
3	M	H	B	D	A
4	B	F	J	G	E

Matrix II आरेख - II					
	5	6	7	8	9
5	V	W	V	X	X
6	Y	N	O	S	O
7	Z	N	R	V	X
8	W	X	Y	W	S
9	P	Y	S	S	O

- A. 20,86,11,65 B. 13,67,22,20
C. 12,89,12,69 D. 20,59,20,76

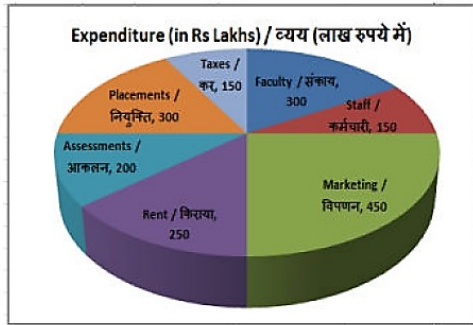
Ans: B

251. Find the square root of 1485961.

- A. 1213 B. 1219

- C. 1229 D. 1239
Ans: B
252. If $a^2 + b^2 = 80$ and $ab = 32$, then calculate the value of $\frac{a-b}{a+b}$.
 A. 0.337 B. 0.339
 C. 0.333 D. 0.335
Ans: C
253. What is the value of $(-7776)^{\frac{2}{5}}$?
 A. 16 B. 36
 C. 64 D. 21
Ans: B
254. What is the value of $x^3 - \frac{1}{x^3} + 8$ when $8x - \frac{8}{x} - 16 = 0$?
 A. 6 B. 8
 C. 16 D. 22
Ans: D
255. The triangle in which the orthocenter, circumcentre, Incenter and the centroid coincide each other at a point is known as _____.
 A. isosceles triangle
 B. equilateral triangle
 C. right angled triangle
 D. obtuse angled triangle
Ans: B
256. If the radius of a circle is decreased to 25% of its original value, calculate the percentage decrease in the area of the circle.
 A. 25% B. 43.75%
 C. 50% D. 93.75%
Ans: D
257. On decreasing the price of a fan by 40%, its sales increases by 50%. What will be the percentage increase or decrease in its revenue?
 A. 15% increase B. 15% decrease
 C. 10% decrease D. 10% increase
Ans: C
258. sum of Rs 2489 is divided among A, B and C such that if Rs 12, Rs 12 and Rs 5 be diminish from the shares of A, B and C respectively, then their shares will be in the ratio of 5 : 3 : 4. What is the new share (in Rs) of C?
 A. 750 B. 1060
 C. 1475 D. 820
Ans: D
259. The milk and water in two vessels are in the ratio of 3 : 1 and 7 : 11 respectively. In what ratio should the liquid in both the vessels be mixed to obtain a new mixture containing half milk and half water?
 A. 5 : 7 B. 4 : 9
 C. 1 : 1 D. 4 : 7

- Ans:** B
260. Average of 14 numbers is 32. If the average of last 5 numbers is 26, then what is the average of the remaining numbers?
 A. 35.33 B. 41.33
 C. 27.5 D. 44.5
Ans: A
261. A person borrows some money for 8 years at a rate of simple interest. If the ratio of principal and total interest is 5 : 8, then what is the rate (in percentage) of interest?
 A. 10 B. 20
 C. 25 D. 30
Ans: B
262. Cost price of a watch is Rs 530. If the loss percentage is 24%, then what is the value (in Rs) of loss?
 A. 127.2 B. 153.2
 C. 139.4 D. 114.2
Ans: A
263. Mahesh buys a watch of Rs 300 and sells it. Mahesh gives two successive discount of 15% and 6% to the buyer. What will be the selling price (in Rs) of the watch?
 A. 213.4 B. 242.3
 C. 239.7 D. 247.4
Ans: C
264. What the simplified value of $\sqrt{2} - \frac{1}{\sqrt{3}}$?
 A. $5\sqrt{3}$ B. $5/\sqrt{3}$
 C. $3\sqrt{5}$ D. $3/\sqrt{5}$
Ans: B
265. P can complete a work in 15 days and Q in 24 days. They began the work together, but Q left the work 2 days before its completion. In how many days, was the work completed?
 A. 12 B. 10
 C. 9 D. 11
Ans: B
266. A bus moves at a speed of 84 km/hr after repairing and moves at a speed of 56 km/hr before repairing. It covers 2x distance in 8 hours after repairing. How much time (in hours) will it take to cover x distance before repairing?
 A. 8 B. 5
 C. 6 D. 9
Ans: C
267. The pie chart shows the breakup of expenditure of a college for the year 2017. Study the diagram and answer the following questions.

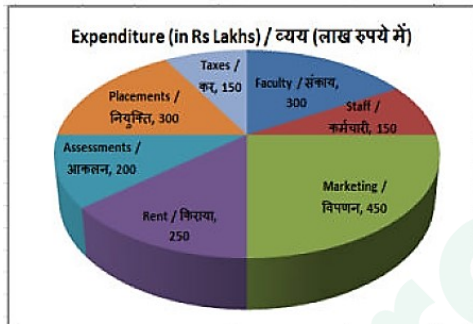


The highest expenditure is for which item?

- A. Rent B. Marketing
C. Assessments D. Placements

Ans: B

268. The pie chart shows the breakup of expenditure of a college for the year 2017. Study the diagram and answer the following questions.

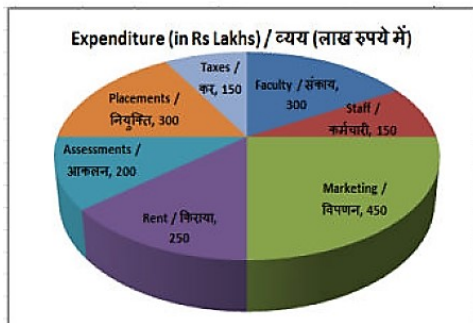


What is the total expenditure (in Rs lakhs)?

- A. 1800 B. 900
C. 2000 D. 1000

Ans: A

269. The pie chart shows the breakup of expenditure of a college for the year 2017. Study the diagram and answer the following questions.

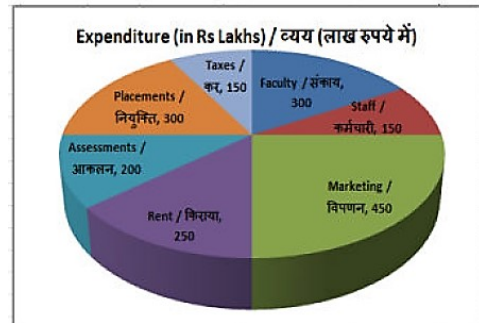


The measure of the central angle of the sector representing Faculty is _____ degrees.

- A. 30 B. 45
C. 75 D. 60

Ans: D

270. The pie chart shows the breakup of expenditure of a college for the year 2017. Study the diagram and answer the following questions.



Expenditure on Assessments and Placements constitute what percent of total expenditure?

- A. 33.3% B. 25%
C. 30% D. 27.77%

Ans: D

271. The perimeter and the breadth of a rectangle are 60 cm and 14 cm respectively. Find its area (in cm²).

- A. 112 B. 448
C. 224 D. 336

Ans: C

272. If the perimeter of a semi-circle is 108 cm, then find its radius (in cm).

- A. 42 B. 28
C. 56 D. 21

Ans: D

273. Find the volume (in cm³) of a cube of side 7.5 cm.

- A. 421.875 B. 77.145
C. 39.245 D. 24.435

Ans: A

274. What is the value of $(\cot 30^\circ + 2/\sqrt{3})$?

- A. $5/\sqrt{3}$ B. $(1 + 2\sqrt{3})/2$
C. $5/6$ D. $2/\sqrt{3}$

Ans: A

275. ΔXYZ is right angled at Y. If $\tan X = 24/7$, then what is the value of $\cot Z$?

- A. $25/7$ B. $24/25$
C. $7/24$ D. $24/7$

Ans: D

276. When the productive capacity of the economic system of state is inadequate to create sufficient number of jobs, it is called _____.

- A. seasonal unemployment
B. structural unemployment
C. disguised unemployment
D. cyclical unemployment

Ans: D

- 277.** Which of the following contributes the maximum earning in Indian Railways?
A. Passenger Earning
B. Goods Traffic Earning
C. Sundry Earning
D. Other Coach Earning

Ans: B

- 278.** Which of the following Vedas is referred to as the starting source of the word Rudra?

- A. Rigveda B. Samaveda
C. Yajurveda D. Atharvaveda

Ans: A

- 279.** The eminent Saint Vallabhacharya was associated with which of the following branches?

- A. Gyanashrayi B. Krishnashrayi
C. Premashrayi D. Ramashrayi

Ans: B

- 280.** Which of the following is NOT a terrestrial planet?

- A. Mercury B. Venus
C. Mars D. Saturn

Ans: D

- 281.** The Line of Cancer passes through how many states of India?

- A. 5 B. 6
C. 7 D. 8

Ans: D

- 282.** When was Guru Nanak Dev born?

- A. 1449 AD B. 1453 AD
C. 1469 AD D. 1499 AD

Ans: C

- 283.** Which of the following country is NOT a member of the 'Indian Ocean Rim Association (IORA)?

- A. Seychelles B. Sri Lanka
C. India D. China

Ans: D

- 284.** Which of the following President was awarded the Nobel Peace Prize 2016?

- A. Raffer Korea
B. Juan Manuel Santos
C. Donald Trump
D. Alexander Lukashenko

Ans: B

- 285.** Who is the the present Prime Minister of Pakistan?

- A. Mamnoon Hussain
B. Shahid Khaqan Abbasi
C. Muhammad Nawaz Sharif
D. Yousaf Raza Gillani

Ans: B

- 286.** In which part of the human body fat is completely digested?

- A. Small Intestine
B. Liver
C. Stomach
D. Large Intestine

Ans: A

- 287.** Which of the following statement(s) is/are **INCORRECT** regarding Phosphorus?

- A. Phosphorus reacts vigorously with water.
B. It is a non-metal.
C. It catches fire on reacting with air.
D. It is found in group 15 of the modern periodic table.

Ans: A

- 288.** Match the following

Body	Type
I. Panchayati Raj/	1. Non-Constitutional
II. Election Commission/	2. Local /government/
III. Central Information Commission	3. Constitutional/

A. I - 1, II - 2, III - 3
B. I - 2, II - 1, III - 3
C. I - 2, II - 3, III - 1
D. I - 1, II - 3, III - 2

Ans: C

- 289.** All the members of a municipality are _____ by the people of municipal area.

- A. Elected directly
B. Elected indirectly
C. Nominated proportionally
D. Nominated indirectly

Ans: A

- 290.** The maintenance functions of living organisms are performed by the _____.

- A. chemical processes
B. life processes
C. physical processes
D. No option is correct.

Ans: B

- 291.** Which of the following may cause the breakdown of pyruvate into lactic acid in our muscles?

- A. Lack of water
B. Lack of Oxygen
C. Lack of carbon dioxide
D. Lack of nitrogen

Ans: B

- 292.** In September 2017, "Pradhan Mantri Sahaj Bijli Har Ghar Yojna" was launched for giving electricity connections in rural and urban areas by _____.

- A. March, 2019
B. December, 2018
C. March, 2018
D. October, 2018

Ans: B

- 293.** By which process the Chinese Scientists have cloned two identical long-tailed macaques?

- A. Polymerase chain reaction
- B. Parthenogenesis
- C. Somatic cell nuclear transfer
- D. Embryonic cell nuclear transfer

Ans: C

294. In India, how much percent of GDP is the fiscal deficit target for the Financial Year 2017-18?

- A. 4.20%
- B. 3.20%
- C. 2.20%
- D. 4.00%

Ans: B

295. On 10 April 2017, Lok Sabha Passed the Motor Vehicles Act (Amendment) Bill, 2016. Under the new provisions, government will develop a scheme for cashless treatment of road accident victims during _____.

- A. Silver hour
- B. Platinum hour
- C. Diamond hour
- D. Golden hour

Ans: D

296. A bullet of mass 10gm is fired with a velocity of 40 m/s from a gun of mass 8 kg. Find the recoil velocity (in m/s) of the gun.

- A. 2
- B. 0.1
- C. 4
- D. 0.05

Ans: D

297. During uniform motion of an object along a straight line, its _____ remains constant with time.

- A. acceleration
- B. deceleration
- C. force
- D. velocity

Ans: D

298. The bodies of penguins are _____ and their feet have webs, making them good swimmers.

- A. heavy
- B. feathery
- C. streamlined
- D. oily

Ans: C

299. Which of the statements given below are correct?

A) Dani Pedrosa won the 2017 Qatar Motorcycle Grand Prix MotoGP.

B) Bernhard Langer won the Golf 2017 BMW PGA Championship.

C) Dustin Johnson won the Formula One 2017 Abu Dhabi Grand Prix.

- A. Only B
- B. B and C
- C. A, B and C
- D. None of these

Ans: D

300. In Microsoft Word, under character formatting _____ increases/decreases the size of the characters.

- A. Size
- B. Font
- C. Effects
- D. Font Style

Ans: A



Latest Sarkari jobs, Govt Exam alerts, Results and Vacancies

- ▶ Latest News and Notification
- ▶ Exam Paper Analysis
- ▶ Topic-wise weightage
- ▶ Previous Year Papers with Answer Key
- ▶ Preparation Strategy & Subject-wise Books

To know more [Click Here](#)



www.prepp.in